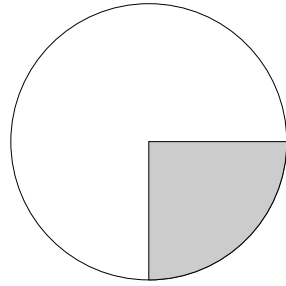


© 2011 A. Berklemper

Welcher Bruch wird hier dargestellt ?

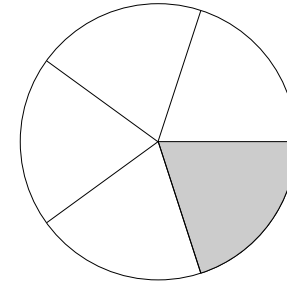
- $\frac{1}{2}$
- $\frac{1}{3}$
- $\frac{1}{4}$
- $\frac{1}{5}$



© 2011 A. Berklemper

Welcher Bruch wird hier dargestellt ?

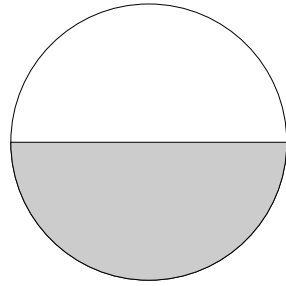
- $\frac{1}{2}$
- $\frac{1}{3}$
- $\frac{1}{4}$
- $\frac{1}{5}$



© 2011 A. Berklemper

Welcher Bruch wird hier dargestellt ?

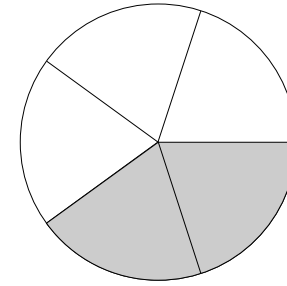
- $\frac{1}{2}$
- $\frac{1}{3}$
- $\frac{1}{4}$
- $\frac{1}{5}$



© 2011 A. Berklemper

Welcher Bruch wird hier dargestellt ??

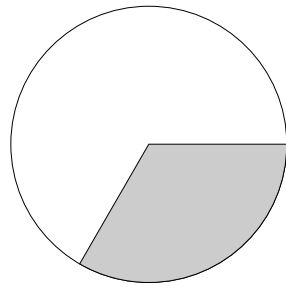
- $\frac{1}{5}$
- $\frac{2}{5}$
- $\frac{3}{5}$
- $\frac{4}{5}$



© 2011 A. Berklemper

Welcher Bruch wird hier dargestellt ?

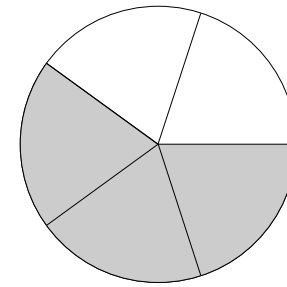
- $\frac{1}{2}$
- $\frac{1}{3}$
- $\frac{1}{4}$
- $\frac{1}{5}$



© 2011 A. Berklemper

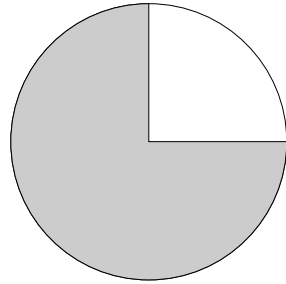
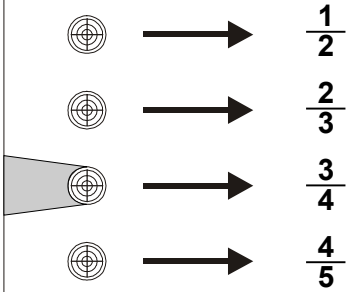
Welcher Bruch wird hier dargestellt ?

- $\frac{1}{5}$
- $\frac{2}{5}$
- $\frac{3}{5}$
- $\frac{4}{5}$



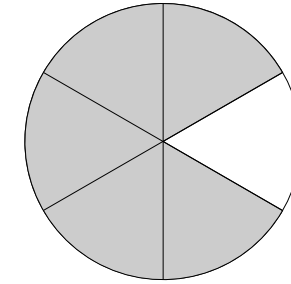
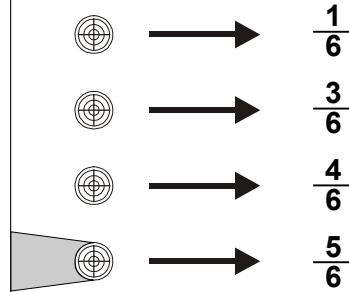
© 2011 A. Berklemper

Welcher Bruch wird hier dargestellt ?



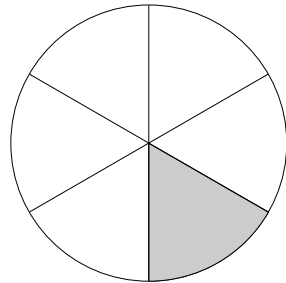
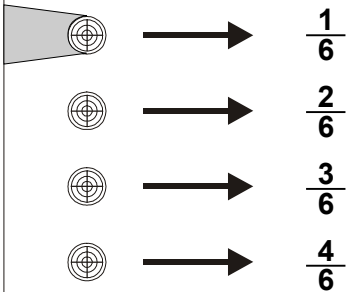
© 2011 A. Berklemper

Welcher Bruch wird hier dargestellt ?



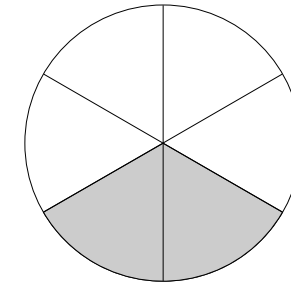
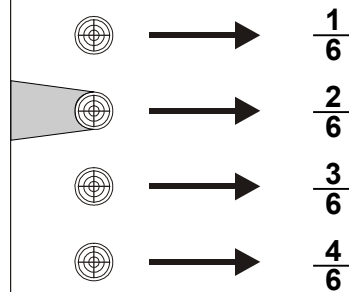
© 2011 A. Berklemper

Welcher Bruch wird hier dargestellt ?



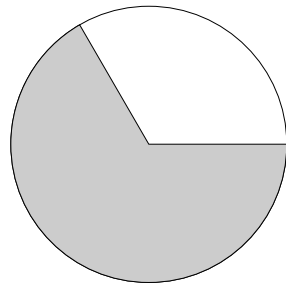
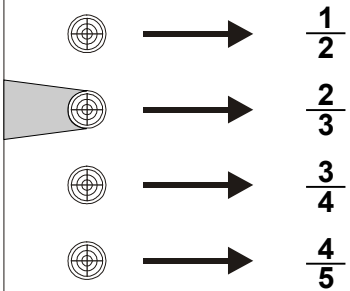
© 2011 A. Berklemper

Welcher Bruch wird hier dargestellt ??



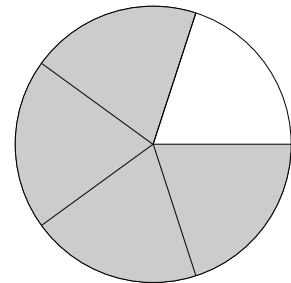
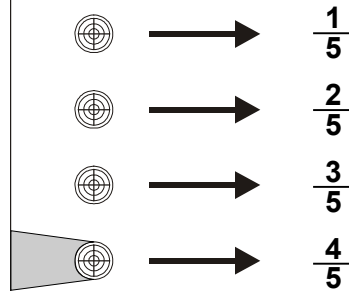
© 2011 A. Berklemper

Welcher Bruch wird hier dargestellt ?



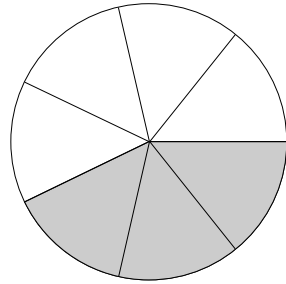
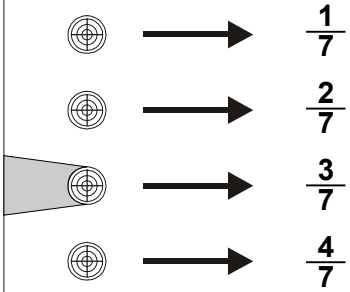
© 2011 A. Berklemper

Welcher Bruch wird hier dargestellt ?



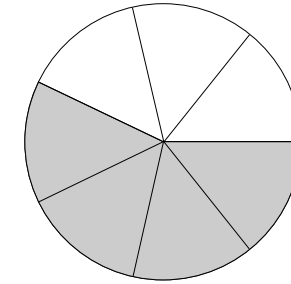
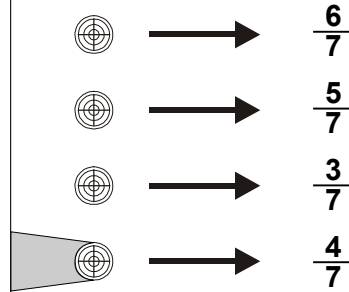
© 2011 A. Berklemper

Welcher Bruch wird hier dargestellt ?



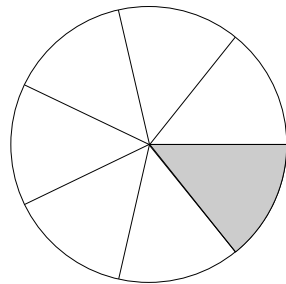
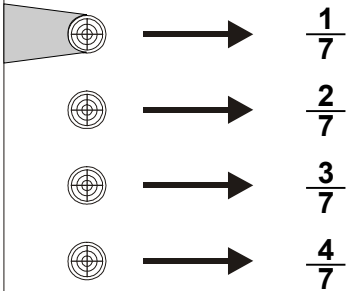
© 2011 A. Berklemper

Welcher Bruch wird hier dargestellt ?



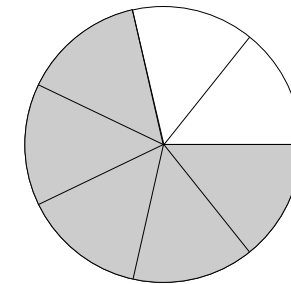
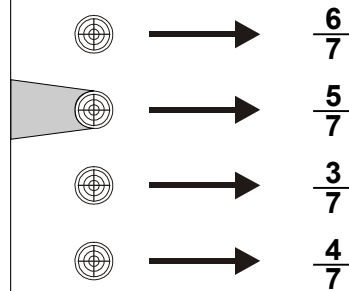
© 2011 A. Berklemper

Welcher Bruch wird hier dargestellt ?



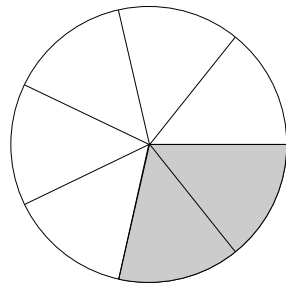
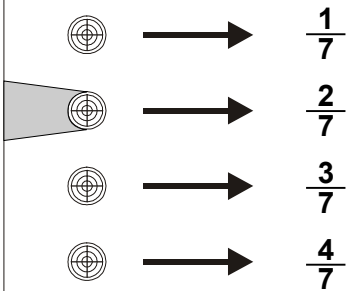
© 2011 A. Berklemper

Welcher Bruch wird hier dargestellt ?



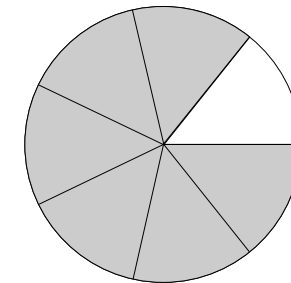
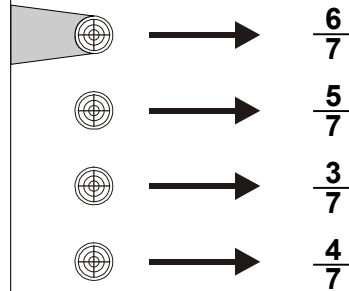
© 2011 A. Berklemper

Welcher Bruch wird hier dargestellt ?



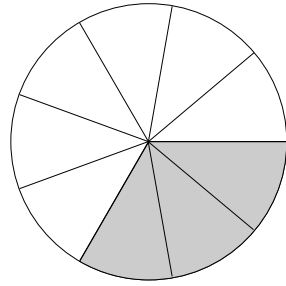
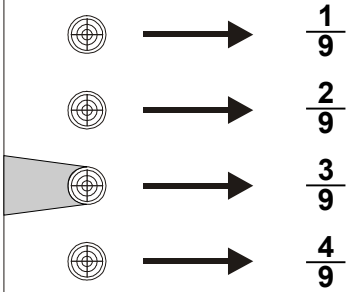
© 2011 A. Berklemper

Welcher Bruch wird hier dargestellt ?



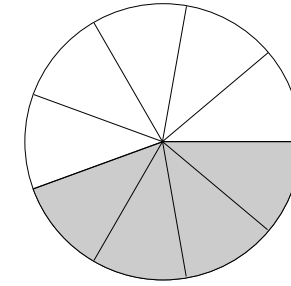
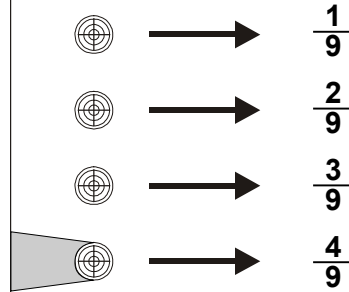
© 2011 A. Berklemper

Welcher Bruch wird hier dargestellt ?



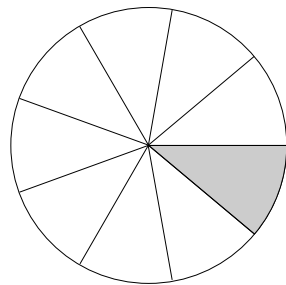
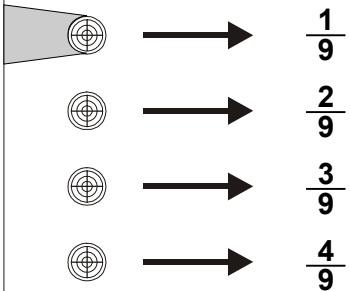
© 2011 A. Berklemper

Welcher Bruch wird hier dargestellt ?



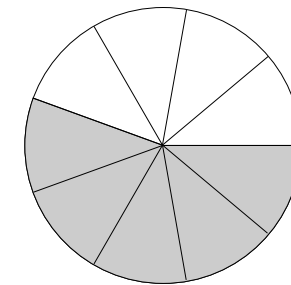
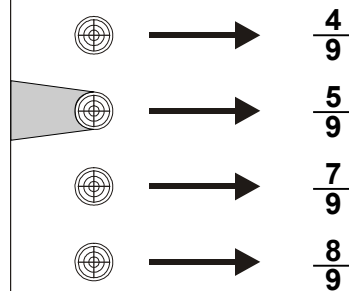
© 2011 A. Berklemper

Welcher Bruch wird hier dargestellt ?



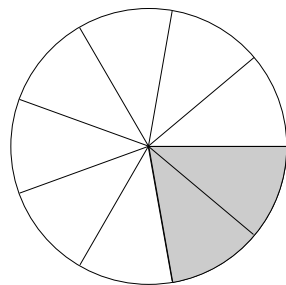
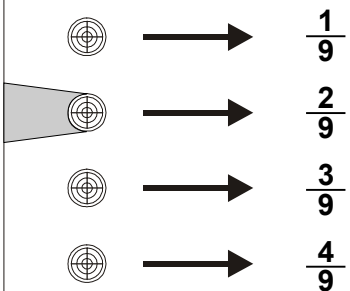
© 2011 A. Berklemper

Welcher Bruch wird hier dargestellt ?



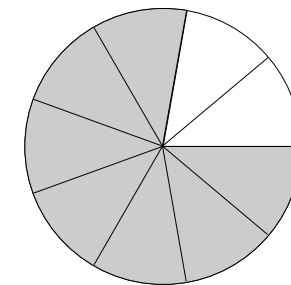
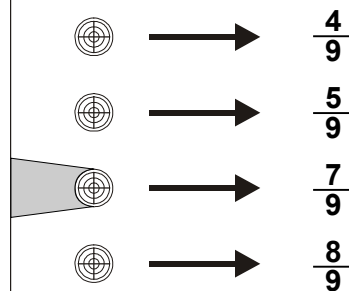
© 2011 A. Berklemper

Welcher Bruch wird hier dargestellt ?



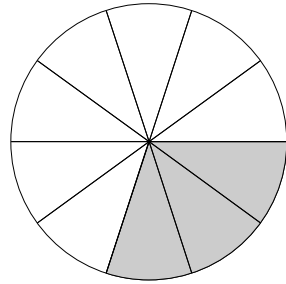
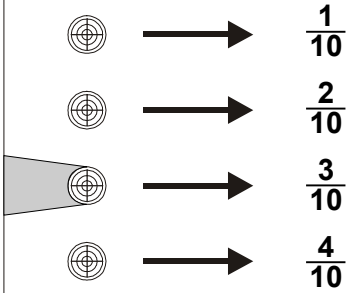
© 2011 A. Berklemper

Welcher Bruch wird hier dargestellt ?



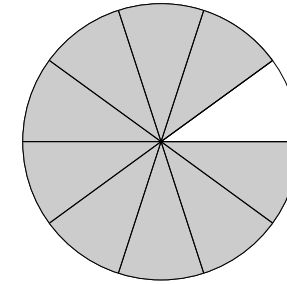
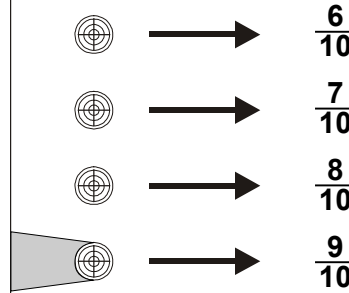
© 2011 A. Berklemper

Welcher Bruch wird hier dargestellt ?



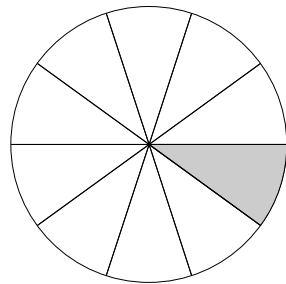
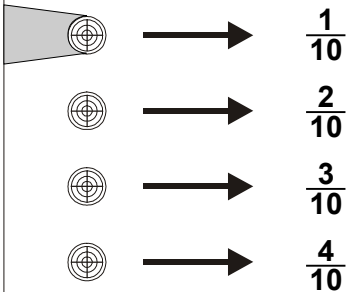
© 2011 A. Berklemper

Welcher Bruch wird hier dargestellt ?



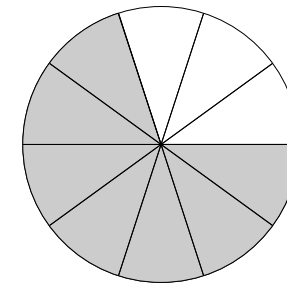
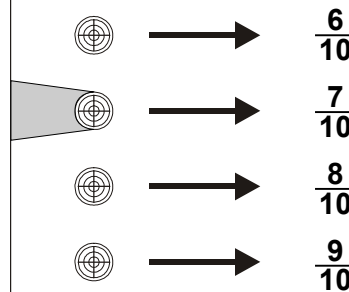
© 2011 A. Berklemper

Welcher Bruch wird hier dargestellt ?



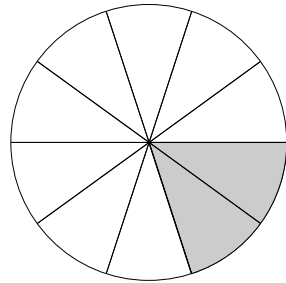
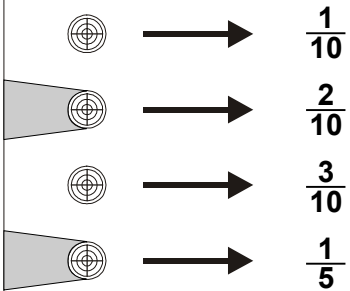
© 2011 A. Berklemper

Welcher Bruch wird hier dargestellt ?



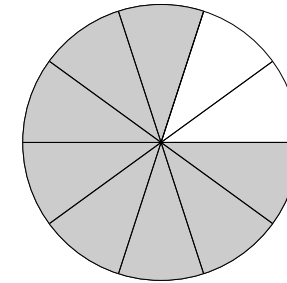
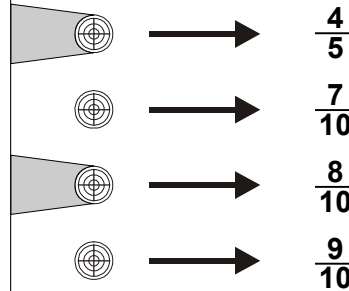
© 2011 A. Berklemper

Welcher Bruch wird hier dargestellt ?



© 2011 A. Berklemper

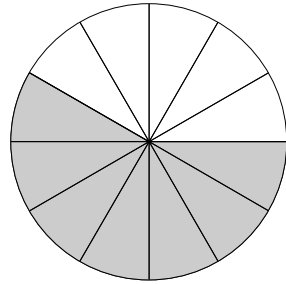
Welcher Bruch wird hier dargestellt ?



© 2011 A. Berklemper

Welcher Bruch wird hier dargestellt ?

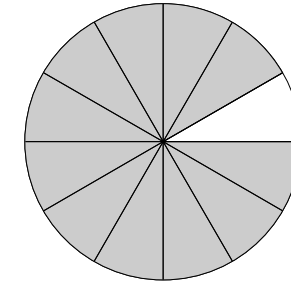
- $\frac{1}{12}$
- $\frac{5}{12}$
- $\frac{7}{12}$
- $\frac{11}{12}$



© 2011 A. Berklemper

Welcher Bruch wird hier dargestellt ?

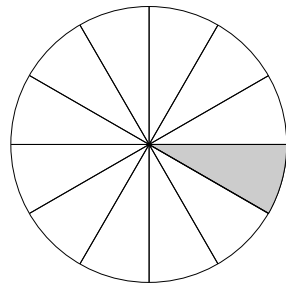
- $\frac{1}{12}$
- $\frac{5}{12}$
- $\frac{7}{12}$
- $\frac{11}{12}$



© 2011 A. Berklemper

Welcher Bruch wird hier dargestellt ?

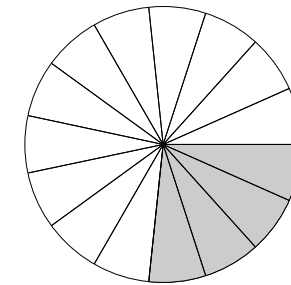
- $\frac{1}{12}$
- $\frac{5}{12}$
- $\frac{7}{12}$
- $\frac{11}{12}$



© 2011 A. Berklemper

Welcher Bruch wird hier dargestellt ?

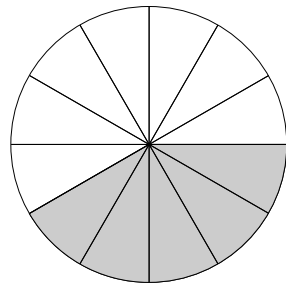
- $\frac{2}{15}$
- $\frac{4}{15}$
- $\frac{7}{15}$
- $\frac{8}{15}$



© 2011 A. Berklemper

Welcher Bruch wird hier dargestellt ?

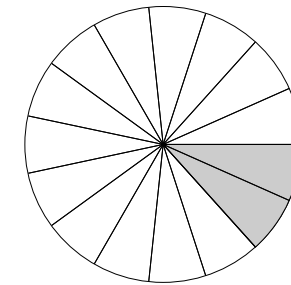
- $\frac{1}{12}$
- $\frac{5}{12}$
- $\frac{7}{12}$
- $\frac{11}{12}$



© 2011 A. Berklemper

Welcher Bruch wird hier dargestellt ?

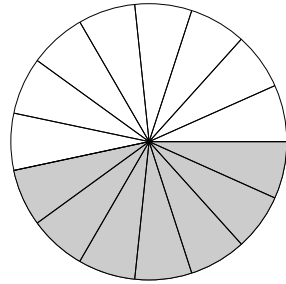
- $\frac{2}{15}$
- $\frac{4}{15}$
- $\frac{7}{15}$
- $\frac{8}{15}$



© 2011 A. Berkemper

Welcher Bruch wird hier dargestellt ?

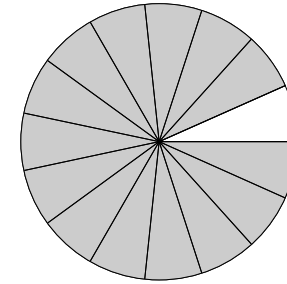
- $\frac{2}{15}$
- $\frac{4}{15}$
- $\frac{7}{15}$
- $\frac{8}{15}$



© 2011 A. Berkemper

Welcher Bruch wird hier dargestellt ?

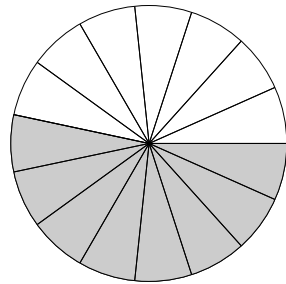
- $\frac{10}{15}$
- $\frac{11}{15}$
- $\frac{13}{15}$
- $\frac{14}{15}$



© 2011 A. Berkemper

Welcher Bruch wird hier dargestellt ?

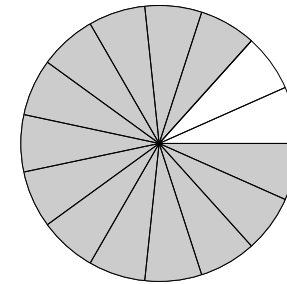
- $\frac{2}{15}$
- $\frac{4}{15}$
- $\frac{7}{15}$
- $\frac{8}{15}$



© 2011 A. Berkemper

Welcher Bruch wird hier dargestellt ?

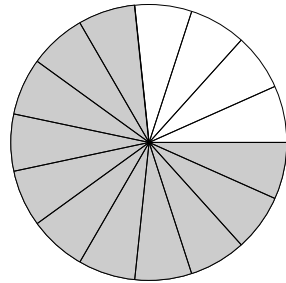
- $\frac{10}{15}$
- $\frac{11}{15}$
- $\frac{13}{15}$
- $\frac{14}{15}$



© 2011 A. Berkemper

Welcher Bruch wird hier dargestellt ?

- $\frac{10}{15}$
- $\frac{11}{15}$
- $\frac{13}{15}$
- $\frac{14}{15}$



© 2011 A. Berkemper

Welcher Bruch wird hier dargestellt ?

- $\frac{10}{15}$
- $\frac{11}{15}$
- $\frac{13}{15}$
- $\frac{2}{3}$

